


## 9 Maak de vier cijferoefeningen.

Voor VVKBaO en OVSG


$216,845 + 387,267 = \underline{\hspace{2cm}}$  OK



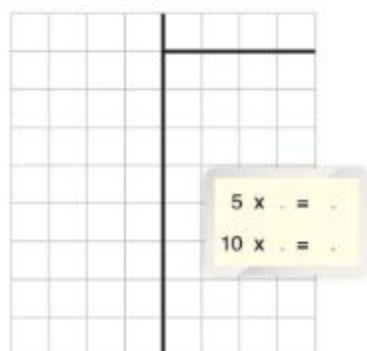
$500 - 275,275 = \underline{\hspace{2cm}}$  OK



$0,174 \times 35 = \underline{\hspace{2cm}}$  OK




$3,026 : 8 = \underline{\hspace{2cm}} \text{ r } \underline{\hspace{2cm}}$  OK




Voor GO!


$216,84 + 387,26 = \underline{\hspace{2cm}}$  OK



$500 - 275,27 = \underline{\hspace{2cm}}$  OK



$0,17 \times 35 = \underline{\hspace{2cm}}$  OK



$3,02 : 8 = \underline{\hspace{2cm}} \text{ r } \underline{\hspace{2cm}}$  OK

